




Yr 1, 15.05.20 answers

Maths

1. Who did you measure? Which unit of measure did you use?

2. Reasoning

True or false?

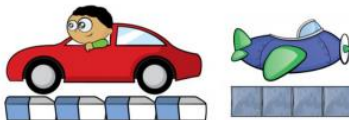


The flower is 8 cubes tall.
Explain your answer.

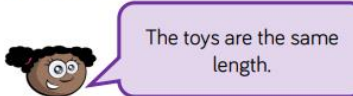
False because the cubes should be level with the bottom of the flower.
The flower is about 6 cubes tall.

3. Problem Solving

Whitney measures the length of two toys.



She says,



Do you agree with Whitney?
Explain your answer.

Whitney is wrong. Both toys are 4 units long, but the rubber and the cubes are different lengths so the toys are not the same length.

English

What type of character is Mr Fox? Can you write some sentences to describe him?

Here are some of mine! ! I actually think he's a nice character but you might not think so.

Mr Fox is kind and caring because he cares for his family. He is clever and cunning because he can trick the farmers and steal the food.

Foundation Subject – RE

Take a close look at the shrine you have drawn. Have you included the following?

