



Yr 2, 13.05.20

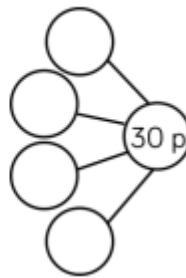
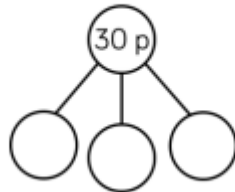
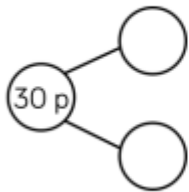
### Maths

#### Yr 2 - Make the same amount

Can you make the same amounts using different coins?

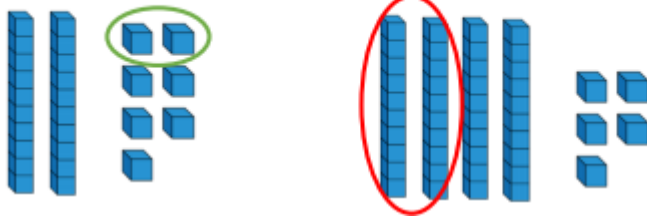
1.

Complete the part-whole models.



2.

The Base 10 represents money. What coin is represented by each circle?



### Reasoning

Make 50 p three ways using the coins below.

You can use the coins more than once.



## English

Before you listen to the next couple of chapters of 'Fantastic Mr Fox,' I'd like you to do some dictionary work and find the meanings to the following words. (If you don't have a dictionary then google the meaning of the words and write them down).

**Crouching**

**Handsome**

**Scent**

**Tenderly**

**Glum**

## Foundations Subject – RE

### Who was Buddha?

Today you will be finding out about: 'Buddha teaching Buddhists how to live their lives.'

Watch the power point in the supporting documents and write or draw your ideas on how you can be kind and positive.



Decorate The Wheel of Life. Can you think of some ways of being kind and positive? Write or draw your ideas in the boxes around the wheel.

