



Shotton Hall Primary School

Working together to

SHINE

Successful, Happy, Inspired and Nurtured towards Excellence




Maths

Can you use your knowledge of finding one more/one less to complete the sentences?
(Remember to use your knowledge of counting in tens first and then adding the ones, for example, for Q1, we would count 10, 20, 21, 22)

Answers -

Q1.




There are **22** blocks.

One more than **22** is **23**.

One less than **22** is **21**.

Q2.

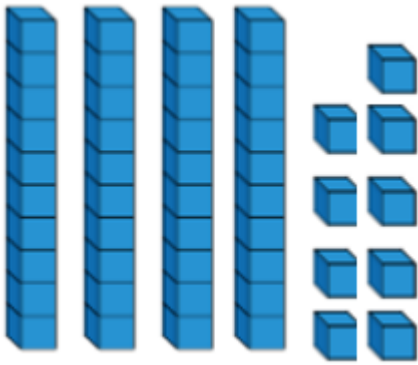


There are **30** blocks.

One more than **30** is **31**.

One less than **30** is **29**.

Q3.



There are **49** blocks.

One more than **49** is **50**.

One less than **49** is **48**.

Challenge –

When finding one more/one less, which digit changes? (The tens or the ones?)

It is usually the ones digit that changes, however if the ones are a 9, adding one more will mean the tens and the ones digits will change.

Why?

For example, adding one more to 19 changes the one ten to two tens, and the 9 ones to 0 ones to make 20.

English - Phonics

Practise saying the letter sounds using the powerpoint presentation provided.

Use the phoneme spotter provided to complete the following.

1. Write the 'aw' and 'or' words in two lists.

'aw' words	'or' words

2. What did Storm get stuck in her paw?

3. What pet does Lorna have?

4. Draw a picture of Storm to cheer her up.

Answers

'aw' words		'or' words	
lawn	shawl	Lorna	Storm
paw	drawer	thorn	poor
draw	claws	for	

2. Storm got a thorn stuck in her paw.
3. Lorna has a pet bird.
4. Your own picture of Storm the dog.

Foundation Subject – Geography

We are going to find out more about the four countries of the UK. Can you remember what they are and what their capital city is?

Click on the link to watch the videoclip.

<https://www.bbc.co.uk/teach/class-clips-video/geography-ks1--ks2-the-united-kingdom/zhtgrj6>

Use Google Earth or Google Maps to find out which country of the UK these famous landmarks are in.



1. Big Ben



2. Forth Bridge



3. Conwy Castle



4. Stonehenge



5. Stormont



6. Loch Lomond

As an extra challenge you could try to find out the names of more landmarks in the UK or draw one of your favourite landmarks!

Answers

- 1. England**
- 2. Scotland**
- 3. Wales**
- 4. England**
- 5. Northern Ireland**
- 6. Scotland**

Challenge – there are many different answers. We would love to hear what you have found out or see your drawings when we return to school!