

Solving Problems - Doubling

Home Learning Challenges

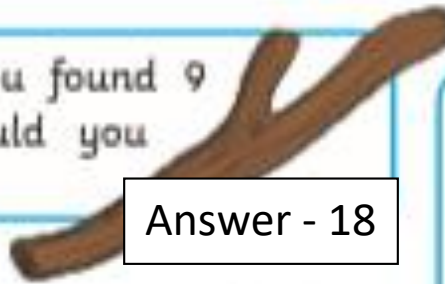
If a ladybird has 4 spots on one side and 4 spots on the other side, how many does she have in total?
Double 4.

Answer - 8




Collect 9 sticks. If you found 9 more, how many would you have altogether?

Answer - 18



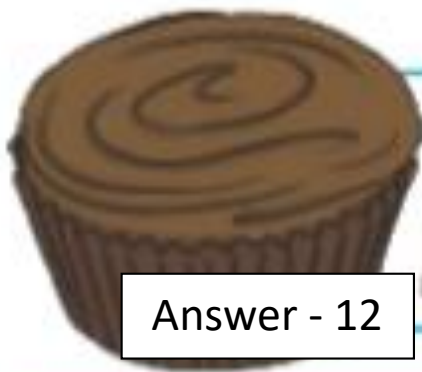
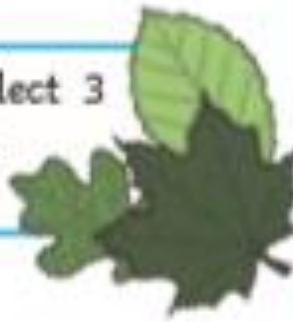
Draw 7 caterpillars on a large leaf. Double the amount. How many caterpillars are there in total? Draw all the caterpillars and count them to check.

Answer - 14



Collect 3 leaves outside. Collect 3 more. How many do you have altogether?

Answer - 6



Answer - 12

Jordan made 6 cupcakes for her class, but she needs to make more. There are double that number of children in her class. How many cupcakes does she need in total? Can you make that many cupcakes?

Some preschool children visit your class for an afternoon. There are usually 10 children in your class but today there are double that amount. How many children are there altogether?

Answer - 20

