

Year 1, Answers from 04.05.20

Answers


Section 1

What's next?

5	10	15	20	25	30	35
---	----	----	----	----	----	----

Section 2

Add 1 more flower.



There would be flowers altogether

Section 3

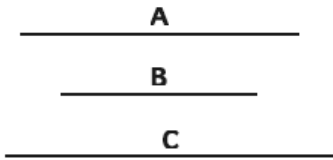
What's the missing number?

$$15 - \boxed{10} = 5$$




Section 4

Which line is the longest?



Section 5

If Sarah has 14 apples and she shares them equally with Lisa, how many apples will they have each?



Section 6

Colour half of these shapes.



Section 7

Circle the odd numbers:



Section 8

Fill in the boxes:

$$20 + \boxed{5} = 25$$

$$17 + \boxed{6} = 23$$