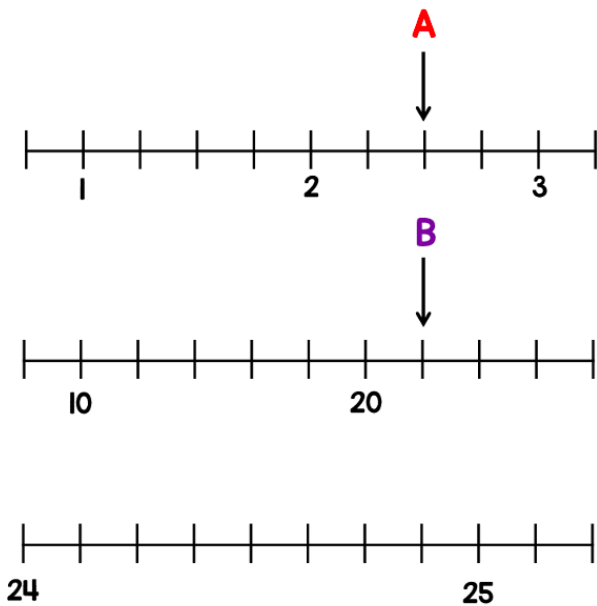


**Maths – Here are some White Rose problems for you to have a go at today. They draw on lots of different strands of Maths so see if you can jog your memories and have a good attempt at answering all of them. Don't forget that you have your study guides to help you too! Don't worry if you get stuck, just try your best 😊**

**1** Given that  $A + B = C$

Draw an arrow pointing to C



**2** George has a box of counters.

- For every 2 red counters there are 5 blue ones.
- George removes 36 blue counters from the box.
- There are now the same amount of red and blue counters.

How many red counters were in the box at the start?

**3** Elijah says he divided 32 by a number and got 64  
Is this possible?



**1** Sam has £29

He gets £28 more for his birthday.  
He buys this cap and jumper with his money.




How much money does he have left?

**2** One fifth of a number is 12

What is a half of the number?

**3**



Mo gives Alex some stickers.  
Alex now has twice as many as Mo.  
How many stickers did Mo give Alex?



1 Circle all the numbers equivalent to 0.25

0.4       $\frac{50}{100}$        $\frac{25}{100}$        $\frac{1}{4}$


2 A rope measures 2.8 metres.



The rope is cut into 10 equal sized pieces.

What is the total length of 5 of these pieces?

3 Sweets come in boxes of 600  
Danny has two boxes of sweets.



He packs the sweets into smaller bags.

There are 21 in each bag.



How many bags can Danny fill using all the sweets?



English – Today we are going to look at the spelling of words containing ‘ie’ and ‘ei’. Remember the rhyme, ‘i before e except after c’? We looked at this pattern not too long ago. However, there were some exceptions to this rule if you remember. Let’s have a look at some of these words today.

### Activity 1

Complete the words in each sentence using either ie or ei.

1. After his lunch, Dylan ate a big p\_\_ce of chocolate cake.
2. Grandma’s heavy shopping bags were w\_\_ghing her down.
3. Joseph loves Sc\_\_nce, whereas Kyle prefers Art.
4. Samantha goes to an exercise class three times per week at the l\_\_sure centre.
5. The UFO was full of green al\_\_ns.

### Activity 2

ie if you can identify the words which are not spelt correctly. Rewrite these words again and include them in a sentence.

ELING

EICE

EIGE

RIEF

DCEITY

EIGHBOURHOOD

EIRCE

ECIEVE

ISCHIEF

### **Activity 3**

Can you think of 6 exceptions to the 'i before e' rule? Write them in a list. Learn the spellings of these words using the 'look, cover, say, write, check' method, or any other technique we use in school.

### **Activity 4**

Word jumble! See if you can look at the following letters and unscramble them to make a word containing ie or ei.

1. E E R H T I
2. F G I O R E N
3. D E W R I

**Foundations Subject – French – Over the coming weeks, we are going to be looking at the sporting event, 'Le Tour de France.' As a starting point to this unit of work, I would like you to use the Powerpoint I have attached to the resources section. Find out as much information as you can and create your own Powerpoint or poster presentation. The information you gather will be useful for you in the coming weeks so make sure that you do a good job!**