



Yr 1, 08.06.20

Maths

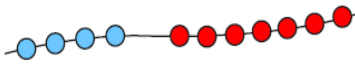
Today you will have a variety of tasks to work through.

Year 1 Maths Activity Mat

②

Section 1

Write a number sentence to show how many beads there are altogether.



Section 2

Draw and colour the next 2 cars in the pattern.



Section 3

If today is Tuesday, what is it tomorrow?

Put a circle around the correct day.

Monday Wednesday Thursday

Section 5

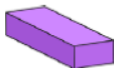
Draw lines to match the name and the shape.



cube



cuboid



triangular prism

Section 6

Which jug is empty?
Tick the correct one.



Section 7

Make this clock show half past 4.



Section 8

How much money is here?



English















Today we are learning about homophones. These are words that sound the same when we say them, but are spelled differently and have different meanings. For example – see and sea. Follow the link below to BBC bitesize, and also watch the power point in the supporting documents and then have a go at making your own list of homophones. How many can you find?

<https://www.bbc.co.uk/bitesize/topics/zqhp2p>

Foundation subject – Science – Investigating microhabitats

Read the information in the supporting documents about microhabitats and the creatures that live there. Then choose two microhabitats (for example a flowering bush and under a rock) to investigate. Identify and count the different minibeasts you find in each habitat.

Look carefully at your two habitats. Count up the number of each kind of minibeast that you find there.

Minibeast		Habitat 1	Habitat 2
Woodlouse			
Slug			
Snail			
Spider			
Beetle			
Fly			
Bee			
Millipede			
Butterfly			
Caterpillar			
Worm			
Ant			
Ladybird			
Wasp			
Other	