





Yr 1, 10.06.20


## Maths-Money

### Fluency

 Use or draw coins to show the given amounts.

- 10p in 5p coins.
- 50p in 5p coins.
- 50p in 10p coins.
- 40p in 5p coins.

 Use  $<$ ,  $>$  or  $=$  to compare the amounts.



7

### Reasoning

Tommy's piggy bank is full of 2 pence pieces, 5 pence pieces and 10 pence pieces.

Using one type of coin at a time, how can he make 30 p?



## Problem solving

Alex has 2 silver coins.


Teddy has 5 bronze coins.

Amir has 1 silver coin.

They all have the same amount of money.

Which coins do they each have?


Collect or draw the coins to prove it.



Are there any other amounts that this works for?

## SPaG

Which year 1 common exception word has Mr Whoops been juggling with?



Practise writing these spellings.

old \_\_\_\_\_

by \_\_\_\_\_

very \_\_\_\_\_

make \_\_\_\_\_

pocket \_\_\_\_\_

Tick the correct sentence.

Can I sit here by you two.

Can I sit here by you two?

Can I sit here by you two!

Write these two sentences again, but as one sentence, joining them with 'and'.

He saw a little dog outside school.

He asked my mum about it.



Circle the words you think should have a capital letter.

car      beth      smart

higher      manchester

jokes      philippa

Tick **two** words that can have '-ing' added to the end to make a new word.

park

there

loud

made

read

## Foundation subject - Science

Can you draw some minibeasts in the kind of microhabitat where they would live? I have included a habitat picture that you could print out or draw your own, then add your own minibeasts. Can you write some labels to explain why they live in that place? For example: Woodlice live under logs because they like dark, damp places and they eat rotting wood.

Can you draw minibeasts in the microhabitat where they might be found?

