



Yr 2, 05.06.20

Maths-

Count vertices on 2-D shapes

A vertex is where two lines meet at a point. Corners are vertices!

Match the shapes to the number of vertices.

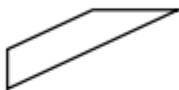
Six

Four






Three



Colour the shapes with 4 vertices.



Complete the table.

Name	Shape	Number of vertices
Pentagon		
Rectangle		
Square		
Triangle		
Hexagon		

Reasoning

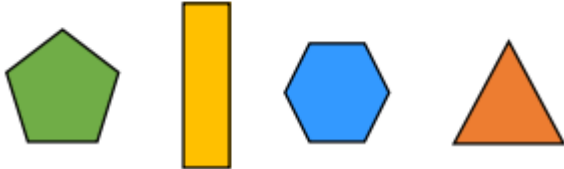
Amir says:

My shape has half the number of vertices as an octagon.



What shape could he have?

Put these shapes in order based upon the number of vertices they have.



English

Write your own recount. You can use mine from Wednesday to help you. Think about something nice you have done this week.

Don't forget to include:-

Who? What? Where? When?

Tell the events in order.

Use time connectives.

Use adjectives

Time words

First	Later	In due course
Next	In the end	At first
Just then	Finally	Until then
	After a while	

Adjectives

Delicious, beautiful, bright, warm, sunny, happy, dry, mild.

You might be able to think of some of your own!

Foundation Subject – Art

This is a lovely activity for you to do today or over the weekend.

You will need pebbles or rocks to complete the task for today. You will also need either paint or felt tips to paint/draw on them.

Watch the power point 'Earth Art Friday'

Once you've watched it, decide what you're going to do. Are you going to make a pattern, an animal or a fish? This is your artwork and your ideas!

Have fun with it and remember you can send me a photo on our Facebook page.

