


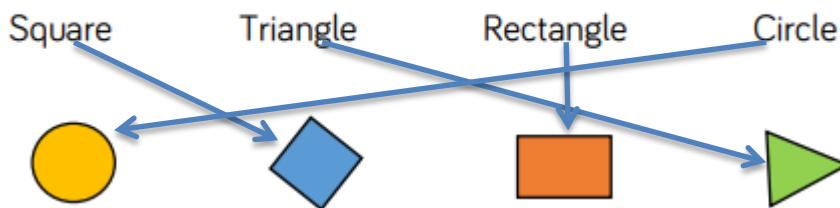


Yr 2, 01.06.20 Answers

Maths- Recognising 2D and 3D shapes

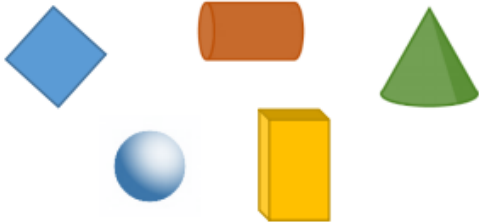
This week we are continuing with White Rose maths. We will begin with fluency then reasoning.

 Match the names of the shapes to the pictures.




Reasoning

Which shape is the odd one out?
Explain why.



The square is the odd one because it is the only 2-D shape or flat shape.

Which shape is the odd one out?
Explain your reasoning.



Three of the shapes are triangles, one is not. Three of them have three sides, one has four.

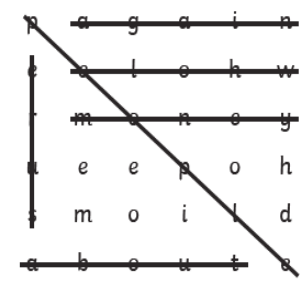
Other answers can be accepted with a clear explanation.

SPaG

a
Circle the conjunction in this sentence.
The chocolate eggs melted when she left them out in the sun.


c
Underline the expanded noun phrase.
They were selling some cute, fluffy kittens.

e
Find the hidden words.
sure
again
people
whole
about
money



b
Write these verbs in the past tense:
run hop
ran
hopped

d
Which year 2 common exception word has Mr Whoops been juggling with?
kind

f
Use the picture clues to write the compound word.

seafood

Spellings

Ask a grown up to check your spellings. How many did you get right?

Foundation Subject – Art

What was your design? Which animal did you make?

This is a leaf cow

