



Yr 2, 29.06.20

Maths- Use Arrays

Fluency

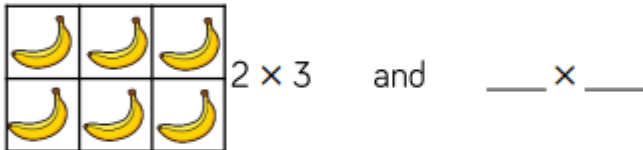
Watch the power point 'amazing arrays' then complete the following:

On the image, find 2×5 and 5×2



Can you represent this array using another object?

Complete the number sentences to describe the arrays.



$___ \times ___$ and $___ \times ___$

Draw an array to show:

$$4 \times 5 = 5 \times 4$$

$$3 \text{ lots of } 10 = 10 \text{ lots of } 3$$

Problem solving

Part of this array is hidden.

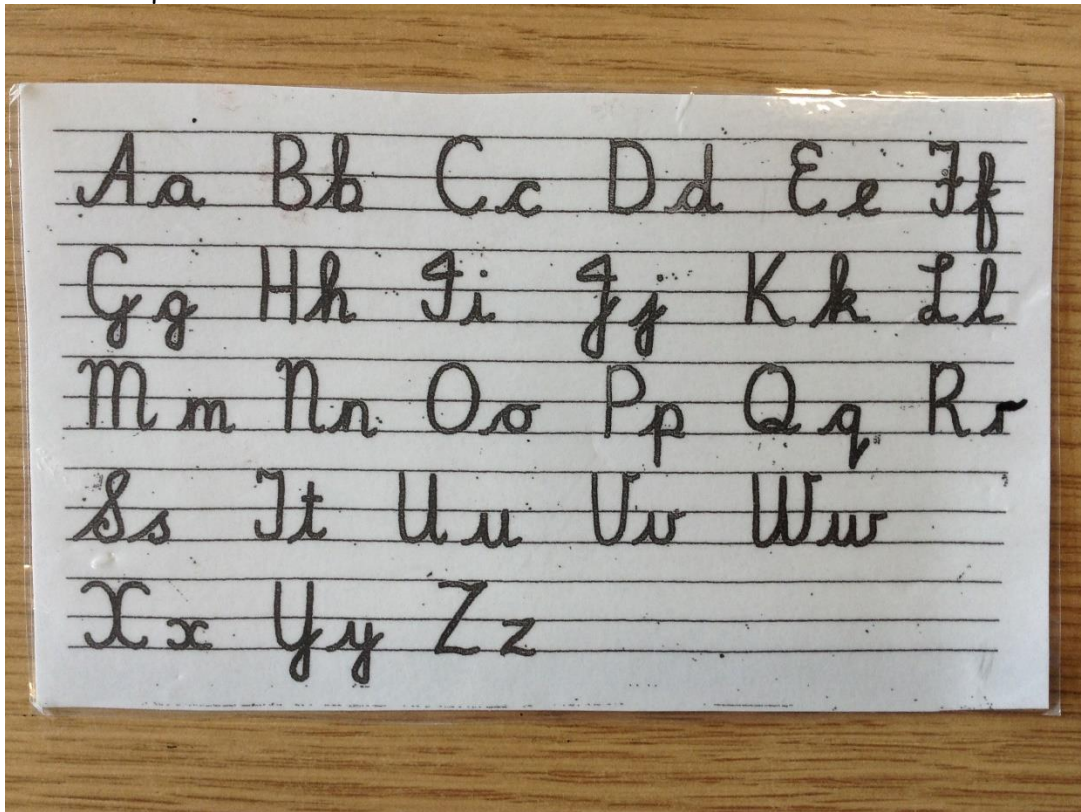


The total is less than 16

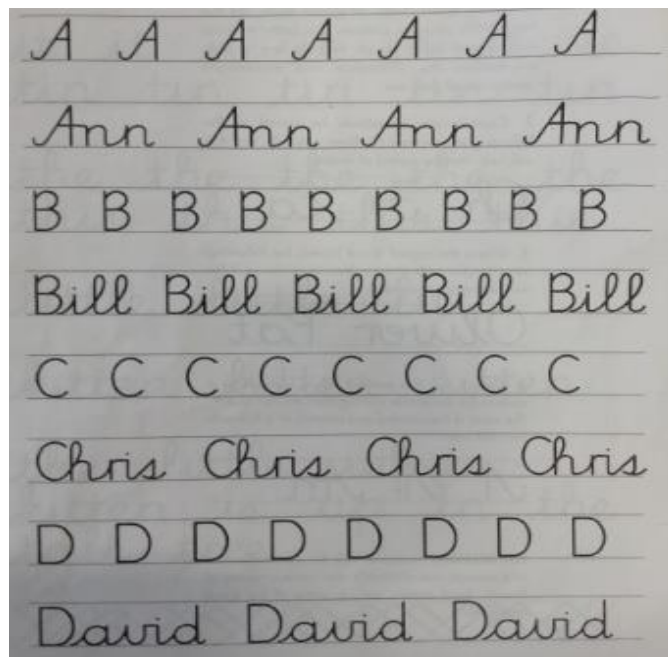
What could the array be?

Handwriting

Can you remember how we form our cursive letters? Now it's time to practise!



Copy the words on a piece of paper, concentrating on your letter formation. There are capital letters too!



Spellings

Practise spellings with 'ff' 'll' 'ss' 'zz' 'ck' sounds.

Off

Well

Miss

Buzz

Back

Now practise spellings with 'n' sound spelt 'n' before 'k'

Bank

Think

Honk

sunk

Now I would like you to learn the following spellings:- It sounds like 'j' but spelt -dge. Once you have learnt your spellings, choose two words and write two separate sentences.

Badge

Edge

Bridge

Dodge

Foundation subject - D&T-kites

Today you are going to make your kite by following the power point 'Making the kite' (in the supporting documents) and by using your own kite design.

Have fun!

