



**Shotton Hall Primary School**

Working together to

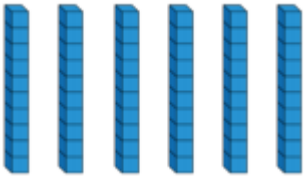
**SHINE**

**Successful, Happy, Inspired and Nurtured towards Excellence**



Yr 2, 17.06.20 answers

### Maths- make equal groups

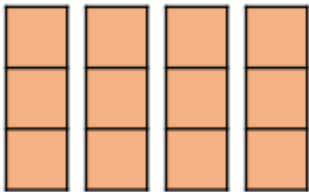


You can have 2 groups of 3 tens.

You can have 3 groups of 2 tens.

**How many ways did you represent four equal groups with three in each group?**

Some examples:

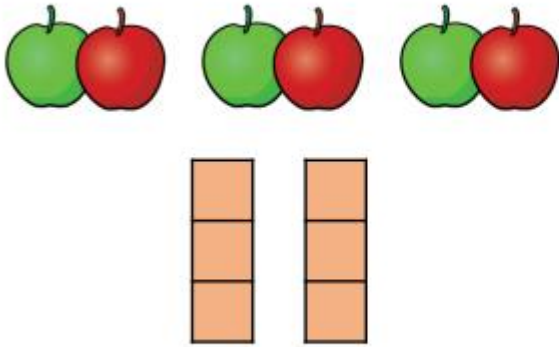


We need two more groups of 3.



## Reasoning and problem solving

Has Eva shown the equal groups correctly?



Draw or use cubes to show what Eva should have done.

Children to draw or make 3 towers with 2 in each tower.

Match the equal groups.



Three 5s



Two 10s



Two 3s

Sweets, squares, two 3s.

Dice, cubes, three 5s.

Coins, number pieces, two 10s.

## English

There are no answers needed for today.

Are there any changes you would like to make to your book cover?

Draw two lines to name the types of sentences.

a

There are lots of trees in the rainforest. — statement

Don't cut down the trees. — command

Underline the verbs in this sentence.

c

They talked and rode their scooters all the way home.

Oops, Mr Whoops has made a punctuation mistake. Help him by correcting his apostrophe.

e

It was Dara's turn to roll the dice next.

Circle the correct homophone for each picture.

b



deer / dear



deer / dear

Change this word into an adjective by adding the suffix **-ful** or **-less**.

d

help

Remember, you may need to make changes.

helpful or helpless

Extend this sentence using the conjunction 'or'.

f

I will climb every hill...

Answers will vary.

The rest of the sentence must include 'or' and make sense.

## Foundation Subject – Science

No answers for today.