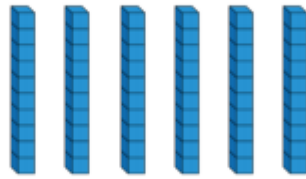




Yr 2, 17.06.20

### Maths- make equal groups

- The Base 10 shows six equal groups with ten in each group.  
There are six tens.



How else can you represent these as equal groups?

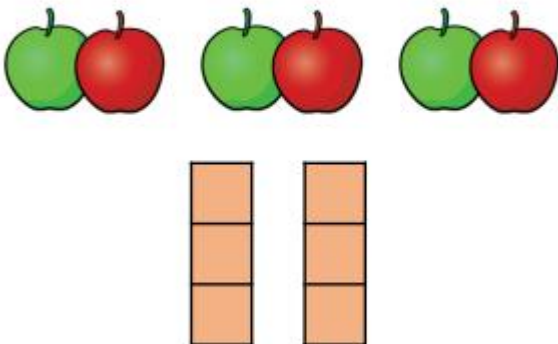
- How many ways can you represent 'four equal groups with three in each group'?
- What else do we need to show 'five 3s'?



How else can we show five equal groups with 3 in each group?

### Reasoning

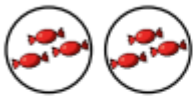
Has Eva shown the equal groups correctly?



Draw or use cubes to show what Eva should have done.

## Problem solving

Match the equal groups.



Three 5s



Two 10s



Two 3s



## English

### English

We are listening to the story of 'Fantastic Mr Fox.' Have you been following the story from the videos I've been uploading for you?

Today, I would like you to design a new front cover for the story. Here is a picture of the current cover and I've also included some of the characters from the story that you might want to include. Don't forget you must include the title and author too!

When you have finished I would like you to write a sentence to say which character is your favourite and give a reason for your answer.



### Topic work – Science - Minibeasts

Design a new minibeast and give it a name. Choose a microhabitat where it would live and then draw your minibeast thinking carefully about the colours and features that would be good for a creature living in that habitat. Then write a fact file about your minibeast explaining facts such as where it lives, how it looks, what it eats and any special abilities it has.