



Yr 2, 03.06.20

Maths- 2-D shapes

Count the sides on 2-D shapes.

Match the shapes to the number of sides.

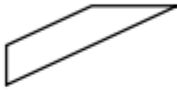
Six

Four






Three



Colour the four-sided shapes.



Complete the table.

Name	Shape	Number of sides
Pentagon		
Rectangle		
Square		
Triangle		
Hexagon		

Did you know? A shape that is four-sided is called a quadrilateral.

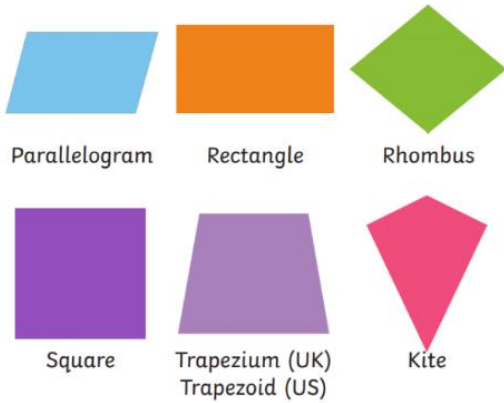
What is a Quadrilaterals

Quadrilateral means a shape that is four-sided.

'Quad' means four and 'lateral' means sides.

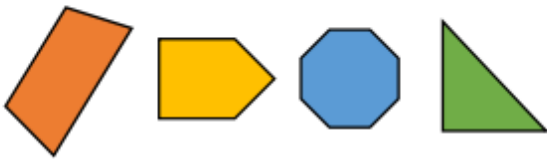
A quadrilateral is a 2D shape that is closed with four straight sides.

Quadrilaterals



Problem solving

If I put these shapes into order from the smallest number of sides to the largest, which shape would come third?



Where would a hexagon come in the list?
Why?

English

Can you find the adjectives I have used in my recount? Remember they are describing words.

Can you find the time words I've used in my recount? I'll give you a clue
'First'

A walk to the dene

Yesterday was a lovely sunny day. I asked my mam if we could go for a walk through the dene to collect some leaves and she said yes! First we had a delicious fried breakfast and after that we set off on our walk. We took drinks with us and some delicious snacks too. On the way we tip-toed across the bridge and pretended there was a troll sitting underneath it. We were enjoying ourselves so much. Later on that day we collected lots of leaves then we decided to race back home. Eventually we reached the house. I was so tired that I fell asleep on the couch with my clothes on. It had been a wonderful day.

Foundation Subject – Art

Earth Art

Today you will be making a collage using natural materials, similar to this one.



First watch the power point 'Earth Art Wednesday' in the supporting documents. Use some of the leaves, flowers and grass you collected on Monday and be as creative as possible! Your collage will be amazing!