

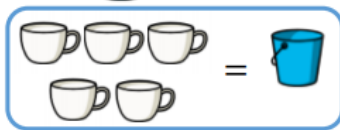



Maths

Volume questions -

Q1.

It takes 5  to fill 1 



How many  will it take to fill 2 buckets? **10**

What about three buckets? **15**

Four buckets? **20**


What do you notice? **We are counting up in fives.**

Can you continue the pattern? **5 buckets = 25 cups**

6 buckets = 30 cups etc

Q2.



Whitney pours her cups into the bottle and they fill it exactly.

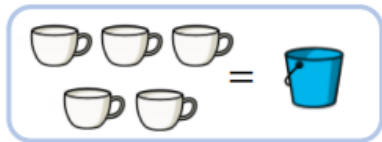



Whitney is wrong. She has not filled the cups to the top so her measuring is inaccurate.


She says the bottle has a capacity of four cups. Do you agree?



Q3.

It takes 5  to fill 1 



It takes 2  to fill 1 



How many  will fill one  ?

What else can you find out?

10 cups will fill one red bucket.

The children may also find that it will take 20 cups to fill 2 red buckets etc.

English

Talk to your grown up about the phonics activity and decide together how accurate you were with your answers. I hope you enjoyed completing the phonics worksheet!

Foundation Subject

I hope you enjoyed using Paint and were able to create a colour picture of your favourite animal.