

Section 1

$$5 \times 6 = \square \quad \square \div 5 = 4$$

$$8 \times 2 = \square \quad \square \div 6 = 3$$

Use these numbers to fill the boxes:

5, 15, 3

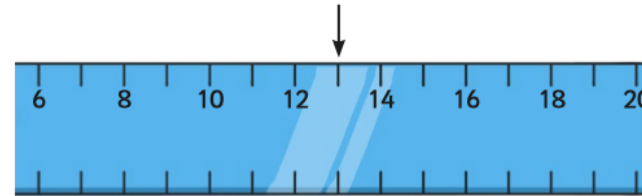
$$\square \div \square = \square$$

Section 2

I am a number. If you double me and add 3, the answer you get is 27. What am I?

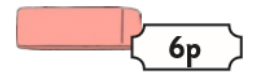
Section 3

What number would the arrow be pointing to?



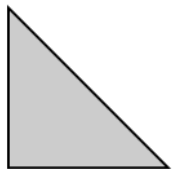
Section 4

Lucy wanted to buy some scissors and a rubber. How much would it cost her? How much change would she get from £1?



Section 5

Draw a line of symmetry for each shape.



Section 6

Sort the words that mean \times or \div

\times	\div

divide times multiply
lots of share product
equal groups of repeated addition

Section 7

Jasper the dog has 5 claws on each paw. How many claws will he have in total?



Section 8

A pirate found some treasure. He found 100 gold coins and had to share them between himself and 19 other pirates. How many gold coins would they each get?