



Yr 2 , 08.07.20

**Maths-**

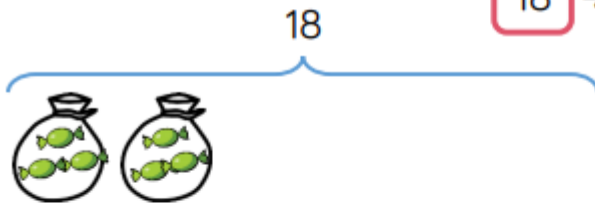
- Pencils come in packs of 20  
We need to put 5 in each pot.  
How many pots will we need?

There are \_\_\_ pencils altogether.  
There are \_\_\_ pencils in each pot.  
There are \_\_\_ pots.

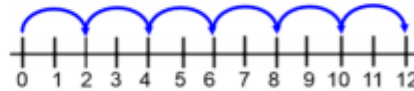


- Mrs Green has 18 sweets.  
She puts 3 sweets in each bag.  
How many bags can she fill?

$$18 \div \square = 3$$
$$18 \div 3 = \square$$



- Mo uses a number line to work out how many equal groups of 2 he can make from 12



Use a number line to work out how many equal groups of 5 you can make from 30

**Problem solving**

You have 30 counters.



How many different ways can you put them into equal groups?

Write down all the possible ways.

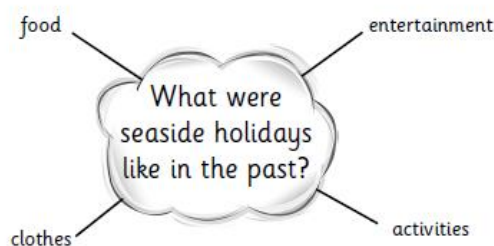
## English-Contractions

Watch the power point 'shortened words' in the supporting documents. Copy out the sentences on the last written slide and shorten the words. For example we will becomes we'll. An apostrophe represents the missing letters. Once you have copied the sentences then reveal the answers and see if you were right.

I am going shopping today. My friend Lucy will be going too. She is a lovely girl. She will get the bus there but I will go by train. We are going to get lunch in town. I am going to bring an umbrella because it is going to rain. We will be meeting my sister and her friends this afternoon because they are going shopping too. My mum can not collect us so we will get the bus home. We will have to be home at seven o'clock this evening and we will not be late.

## Foundation subject – History

Today, you will be searching for clues in photographs to find out what holidays were like in the past. Watch the power point 'Seaside holidays Wednesday 8<sup>th</sup> July' and look closely at the photographs. Write down your ideas on a spider diagram like the one shown below.



## Additional photos



