

Year 2 Spelling, punctuation and grammar -ANSWERS

**a**

Write a **question** about the picture.

For example:

What ingredients is he using?

And a **exclamation**. (starting with 'What' or 'How').


For example

How tasty that looks!



**b**

Look carefully at these homophones. Match the picture to the correct spelling.

**won** **one**



Write the correct spellings:



**bear** **bare**

**c**

Tick either past or present tense for each sentence.

**Lennie is clapping his hands.**

past tense  present tense

**Dad was playing on the scooter.**

past tense  present tense

**She just drank water.**

past tense  present tense

**d**

Write three new words by adding these suffixes **-y**, **-er** and **-ed** to the root word...

**whine**

**whiny**

**whiner**

**whined**

**e**

Add commas to these sentences.

**Hats, gloves, scarves and coats were on the floor.**

**The teacher chose Jim, Mohammed, Ciara and Gethin to tidy it up.**

**f**

Oops, Mr Whoops has spelt these common exception words backwards! Write them correctly, four times each, to help him.

dlot **told told told told**

tsal **last last last last**

htap **path path path path**

dliw **wild wild wild wild**

stnerap **parents**

## Maths – Measuring Mass – ANSWERS

### Fluency

*apple - 80g*

*lime - 55g*

*satsuma - 65g*

*plum - 40g*

*lightest to heaviest: plum, lime, satsuma, apple*



### Reasoning

*Adam is incorrect. The pink pencil case has a mass of 12g. The spotty pencil case has a mass of 15g. The pink pencil case looks like it weighs more because the scales go up in different intervals. The difference between the items' masses is 3g.*



Mastery

*A small tin of beans has a mass of 50g.*

*The raisins have a mass of 80g.*

